

rekenbundel




Tellen en splitsen tot 10



Tellen en splitsen tot 20




Getallenkennis tot 20



Klok: het uur



De helft





Sommen tot 10



$$10 - 2 = \dots\dots$$

$$4 + 5 = \dots\dots$$

$$5 + 4 = \dots\dots$$

$$9 - 5 = \dots\dots$$

$$8 - 5 = \dots\dots$$

$$5 + 5 = \dots\dots$$

$$3 + 6 = \dots\dots$$

$$8 - 6 = \dots\dots$$



$$6 + 3 = \dots\dots$$

$$6 + 4 = \dots\dots$$

$$10 - 4 = \dots\dots$$

$$9 - 7 = \dots\dots$$

$$3 + 4 = \dots\dots$$

$$10 - 3 = \dots\dots$$

$$8 - 2 = \dots\dots$$

$$4 + 4 = \dots\dots$$



Sommen tot 10



$$10 - 2 = \dots\dots$$

$$4 + 2 = \dots\dots$$

$$9 - 5 = \dots\dots$$

$$7 + 3 = \dots\dots$$

$$8 - 2 = \dots\dots$$

$$6 + 2 = \dots\dots$$

$$10 - 5 = \dots\dots$$

$$8 + 2 = \dots\dots$$



$$9 - 7 = \dots\dots$$

$$3 + 4 = \dots\dots$$

$$8 - 5 = \dots\dots$$


$$6 + 3 = \dots\dots$$

$$7 - 4 = \dots\dots$$

$$5 + 5 = \dots\dots$$

$$9 - 2 = \dots\dots$$

$$2 + 8 = \dots\dots$$





Sommen tot 20



$$10 + 5 = \dots\dots$$

$$3 + 10 = \dots\dots$$

$$9 + 10 = \dots\dots$$

$$10 + 0 = \dots\dots$$

$$7 + 10 = \dots\dots$$

$$10 + 10 = \dots\dots$$

$$10 + 1 = \dots\dots$$

$$0 + 20 = \dots\dots$$



juist voor 20 staat

juist na 15 komt


tussen 17 en 19 ligt

juist na 13 is

tussen 15 en 17 ligt



Sommen tot 20



$$2 + 10 = \dots\dots$$

$$10 + 10 = \dots\dots$$

$$8 + 10 = \dots\dots$$


$$10 + 3 = \dots\dots$$

$$6 + 10 = \dots\dots$$

$$20 + 0 = \dots\dots$$

$$10 + 1 = \dots\dots$$

$$8 + 10 = \dots\dots$$




juist na 16 komt

juist voor 20 komt


tussen 13 en 15 ligt

juist na 11 is


tussen 14 en 16 ligt




Hoeveel? Teken stipjes bij.




17



13



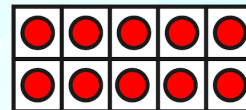
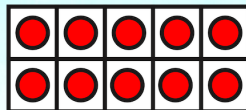

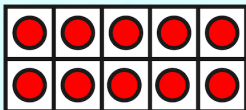
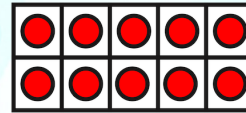

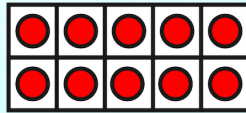

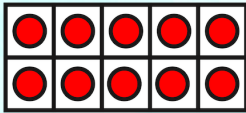





15



20












Hoeveel? Schrijf het getal.





Hoeveel? Schrijf het getal.





Zoek de buren.



11



14

19



18



13



12

16



17



Zoek de buren.

14

19

17

17

15

11

13

15

20





Welke sommen horen in het rijtje thuis? Kleur deze.



$$2 + 3$$

$$4 + 2$$

$$8 - 3$$

$$4 + 3$$

$$3 + 3$$

$$7 - 2$$

$$5 + 3$$

$$5 + 3$$



$$10 - 3$$

$$3 + 4$$

$$5 + 2$$

$$4 + 3$$

$$9 - 2$$

$$2 + 4$$

$$9 - 3$$

$$5 + 2$$



$$5 + 3$$

$$10 - 2$$

$$6 + 2$$

$$9 - 2$$

$$3 + 6$$

$$9 - 3$$

$$5 + 4$$

$$2 + 6$$



Welke sommen horen in het rijtje thuis? Kleur deze.



$5 + 3$

$10 - 3$

$2 + 6$

$4 + 4$

$9 - 1$

$5 + 2$

$10 - 2$

$6 + 3$



$10 - 1$

$5 + 4$

$5 + 5$

$10 - 2$

$7 + 2$

$10 - 0$

$4 + 5$

$1 + 8$



$7 + 3$

$10 - 1$

$4 + 5$

$2 + 8$

$3 + 6$

$1 + 9$

$6 + 4$

$5 + 5$






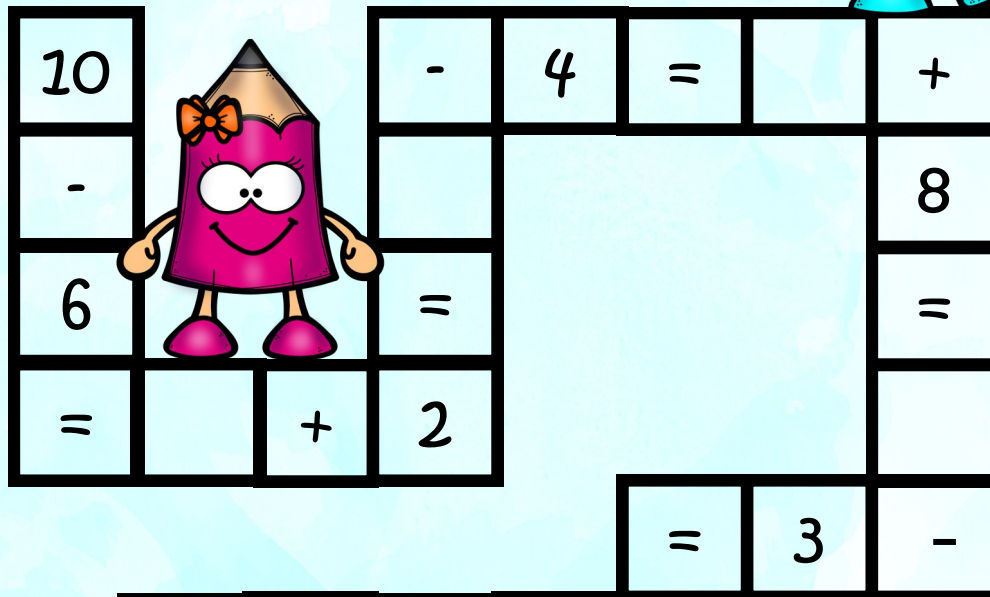

Zoek de juiste weg!



5	+	3	=		-	2	=	
								+
								3
								=
				3	-			
				=		=		
						2	-	
				+				
				6				
				=				
					-	3	=	
								+
								3
5	+		=	6	-		=	


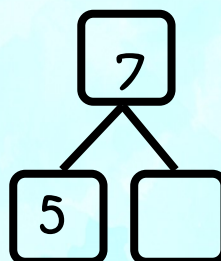
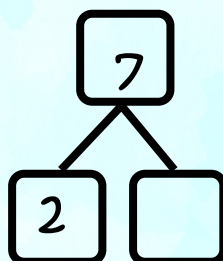




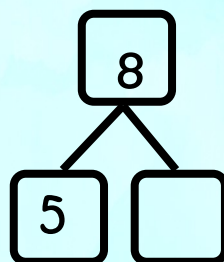
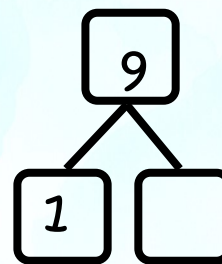








Zoek de juiste weg!



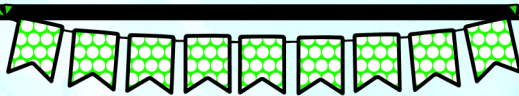


Splits je mee?





Splits je mee?



6 9 10 8

4 5 7 3

7 5 8 9

4 2 6 3

6 9 7 8

3 2 5 4







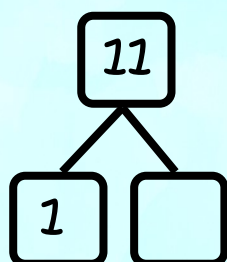

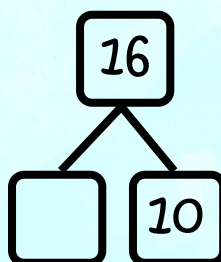


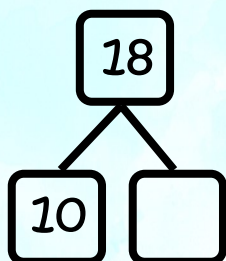
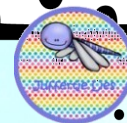
7 8 7 9

0 3 2 1





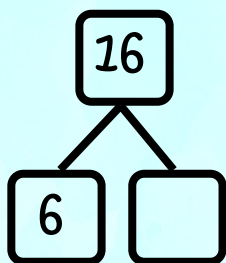





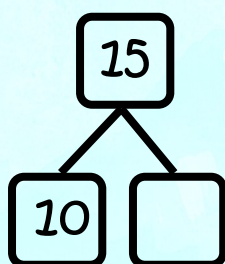
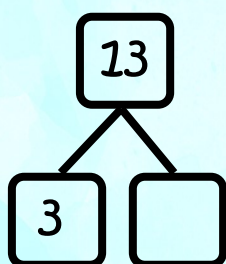


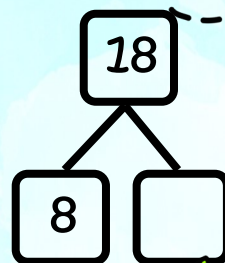
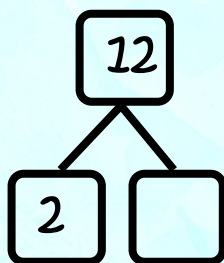




Splits je mee?







Splits je mee?



Zoek de vriendjes van 10 en geef ze dezelfde kleur.



9	4	5	7	8	3	6
6	1	7	10	3	5	2
0	4	5	3	2	7	8
4	7	6	1	9	8	3
10	5	8	4	6	0	5



..... + = 10

..... + = 10

..... + = 10

..... + = 10

..... + = 10

..... + = 10

..... + = 10

..... + = 10

..... + = 10


..... + = 10



Hoe laat is het?



Het is uur.



Het is uur.



Het is uur.




Het is uur.



Het is uur.




Het is uur.



Het is uur.



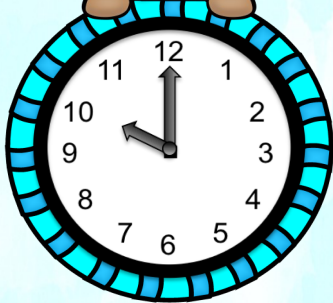
Het is uur.




Het is uur.



Hoe laat is het?



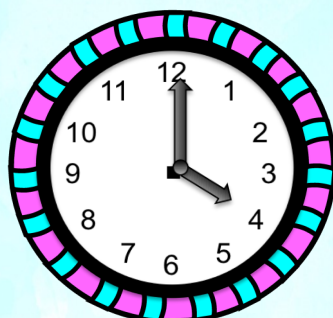
Het is uur.



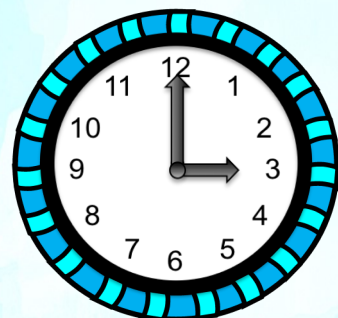
Het is uur.




Het is




Het is



Het is



Het is



Het is



Het is





$18 \bigcirc 20$

$17 \bigcirc 14$

$16 < \dots\dots$

$11 \bigcirc 13$

$16 \bigcirc 16$

$10 > \dots\dots$

$20 \bigcirc 20$

$13 \bigcirc 19$

$20 = \dots\dots$

$12 \bigcirc 12$

$14 \bigcirc 17$

$18 < \dots\dots$

$15 \bigcirc 10$

$12 \bigcirc 20$


$14 > \dots\dots$

$12 \bigcirc 12$

$19 \bigcirc 19$

$16 > \dots\dots$





18 ○ 20 17 ○ 14 16 <

11 ○ 13 16 ○ 16 10 >


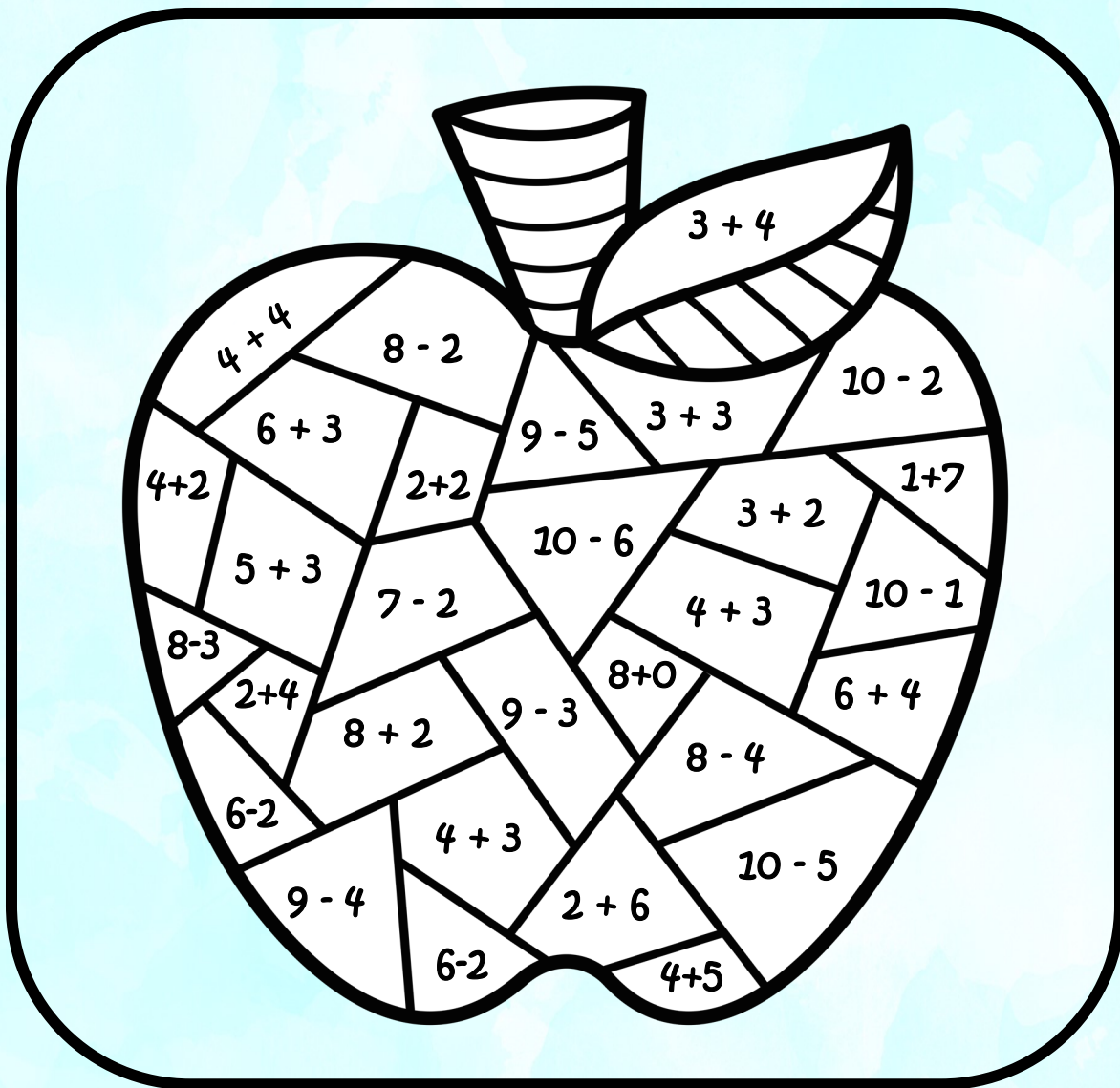
20 ○ 20 13 ○ 19 20 =



12 ○ 12 14 ○ 17 18 <

15 ○ 10 12 ○ 20 14 >

12 ○ 12 19 ○ 19 16 >









Plak in de juiste kolom.



8



9



10




$7 + 2$	$5 + 3$	$6 + 4$	$2 + 6$	$8 + 2$
$4 + 4$	$6 + 3$	$2 + 7$	$1 + 8$	$5 + 4$
$5 + 5$	$7 + 3$	$6 + 4$	$0 + 8$	$7 + 1$




Omkring de helft en vul in.



De helft van 8 is




De helft van 4 is



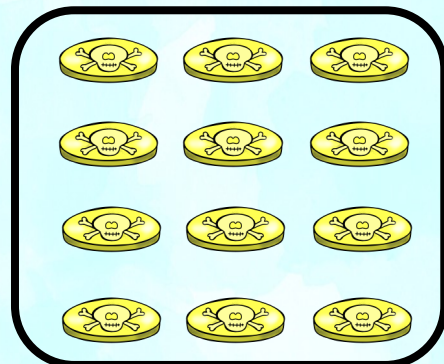
De helft van 10 is



De helft van 6 is



De helft van 2 is



De helft van 12 is

